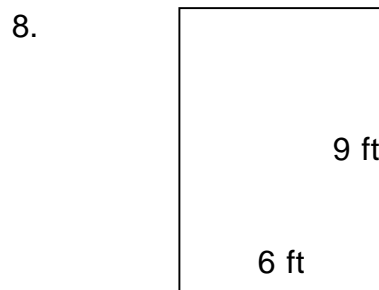

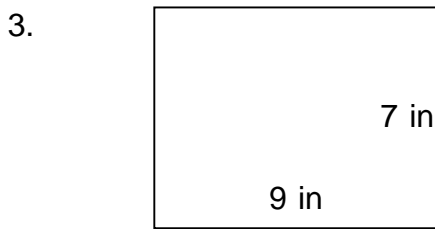
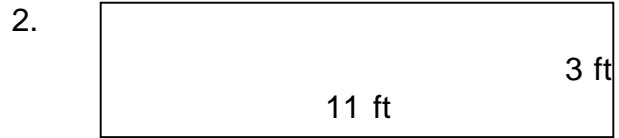


Perimeter and area of rectangles

Grade 3 Geometry Worksheet

Find the perimeter and area of each rectangle.



Perimeter and area of rectangles

Grade 3 Geometry Worksheet

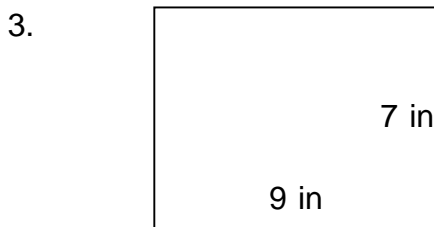
Find the perimeter and area of each rectangle.



$P = 40 \text{ in}$ $A = 64 \text{ in}^2$



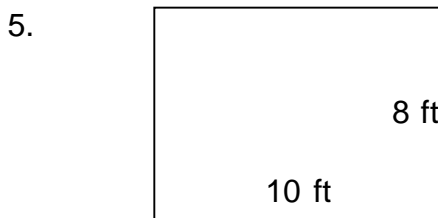
$P = 28 \text{ ft}$ $A = 33 \text{ ft}^2$



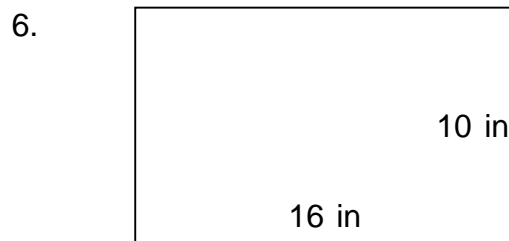
$P = 32 \text{ in}$ $A = 63 \text{ in}^2$




$P = 56 \text{ in}$ $A = 132 \text{ in}^2$



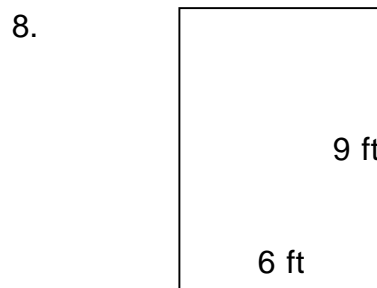
$P = 36 \text{ ft}$ $A = 80 \text{ ft}^2$



$P = 52 \text{ in}$ $A = 160 \text{ in}^2$



$P = 42 \text{ in}$ $A = 90 \text{ in}^2$



$P = 30 \text{ ft}$ $A = 54 \text{ ft}^2$
